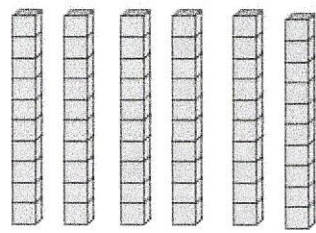
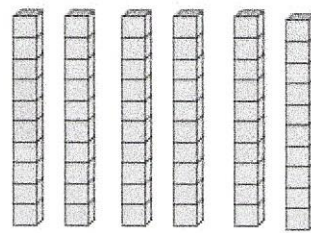


1 Complète.



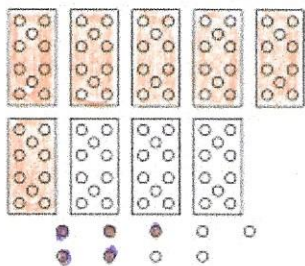
$60 + 10 = 70$



$60 + 14 = 74$

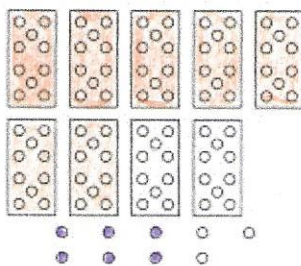
2 Colorie et écris le nombre..

6 dizaines et 5 unités



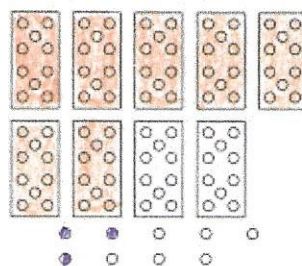
65

7 dizaines et 6 unités



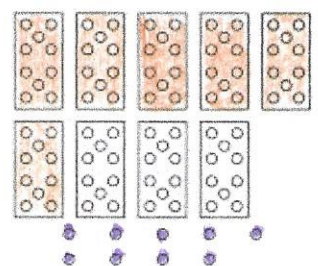
76

7 dizaines et 3 unités



73

6 dizaines et 9 unités

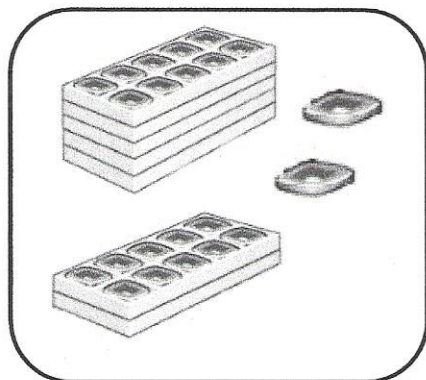


69

3 Relie les étiquettes qui correspondent au même nombre.

| | | |
|-----------------|----|----------|
| Soixante-dix | 67 | $70 + 0$ |
| Soixante-sept | 75 | $60 + 7$ |
| Soixante-trois | 63 | $70 + 5$ |
| soixante-quinze | 70 | $60 + 3$ |

4 Relie



72

62

$60 + 12$

$60 + 2$

